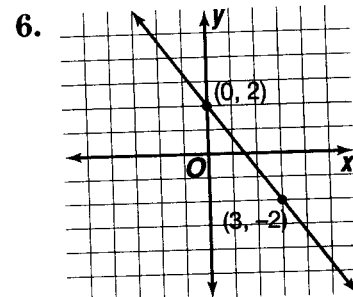
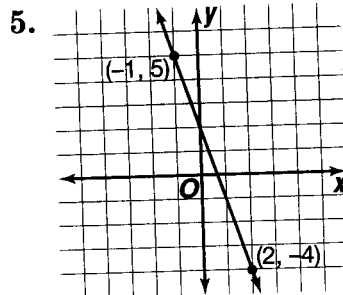
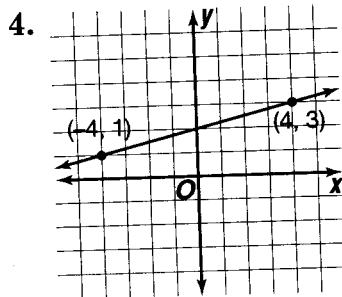
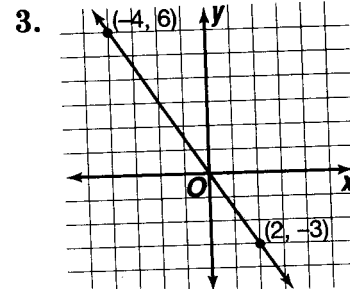
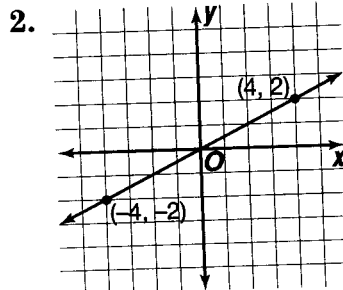
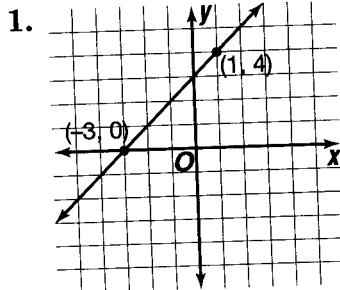


Slope

Determine the slope of each line.



Determine the slope of the line passing through the points whose coordinates are listed in each table.

7.

| x | y |
|----|----|
| -1 | -3 |
| 0 | 0 |
| 1 | 3 |
| 2 | 6 |

8.

| x | y |
|----|---|
| -2 | 5 |
| 2 | 4 |
| 6 | 3 |
| 10 | 2 |

9.

| x | y |
|----|---|
| -3 | 4 |
| -1 | 5 |
| 1 | 6 |
| 3 | 7 |

Determine the slope of each line.

10. the line through points at (3, 4) and (4, 6)

11. the line through points at (-3, -2) and (-2, -5)

12. the line through points at (2, 3) and (-5, 1)

13. the line through points at (4, -1) and (9, 6)

14. the line through points at (-4, 4) and (-9, -8)

15. the line through points at (-6, 2) and (7, -3)