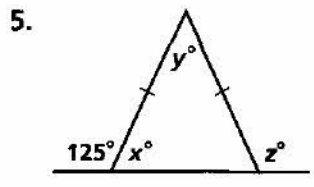
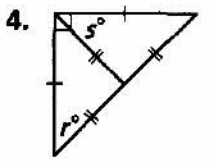
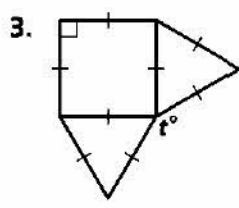
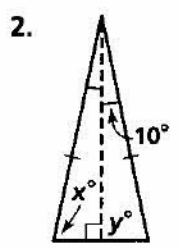
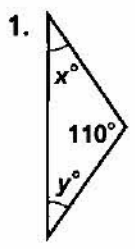


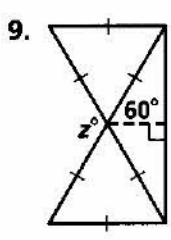
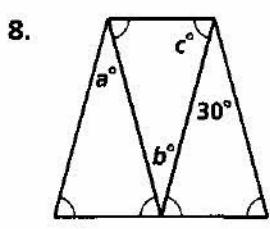
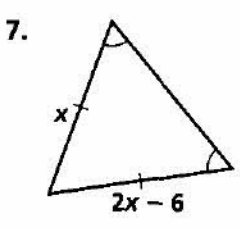
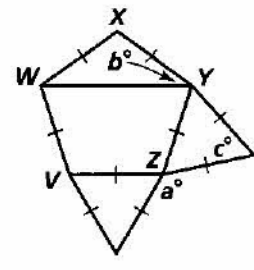
Practice 4-5

Isosceles and Equilateral Triangles

Find the values of the variables.

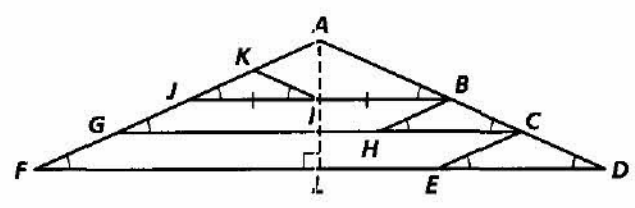


6. $WXYZV$ is a regular polygon.



Complete each statement. Explain why it is true.

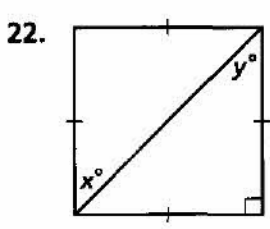
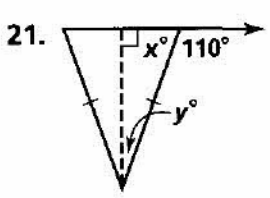
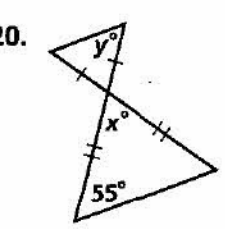
10. $\overline{AF} \cong \underline{\quad?}$
11. $\overline{CA} \cong \underline{\quad?}$
12. $\overline{KI} \cong \underline{\quad?}$
13. $\overline{EC} \cong \underline{\quad?}$
14. $\overline{JA} \cong \underline{\quad?}$
15. $\overline{HB} \cong \underline{\quad?}$



Given $m\angle D = 25$, find the measure of each angle.

16. $\angle JAB$
17. $\angle FAL$
18. $\angle JKI$
19. $\angle DLA$

Find the values of x and y .



All rights reserved.

© Pearson Education, Inc., publishing as Pearson Prentice Hall.