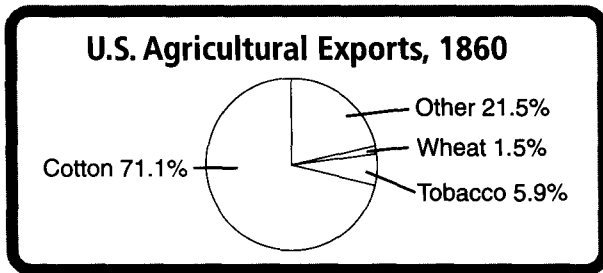
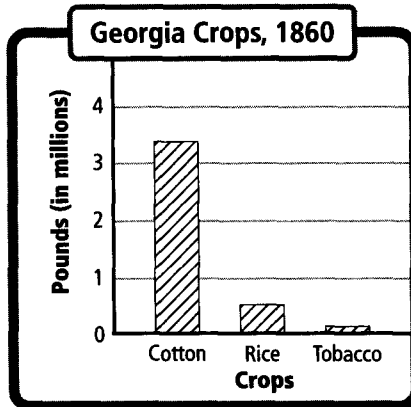
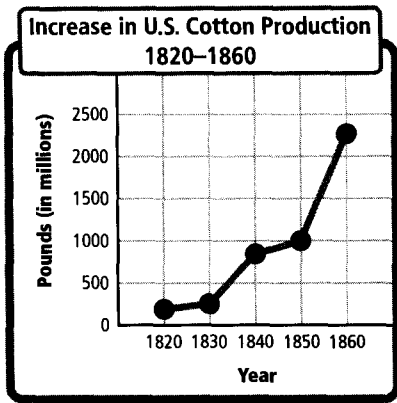


# Skillbuilder: Compare Bar, Line, and Circle Graphs



## Practice

1. According to the bar graph, what is the difference in pounds between the cotton and tobacco in 1860? \_\_\_\_\_
2. According to the circle graph, which crop had the most exports in 1860? \_\_\_\_\_
3. What is the span of years on the line graph? \_\_\_\_\_
4. How are bar graphs, line graphs, and circle graphs different? \_\_\_\_\_  
 \_\_\_\_\_  
 \_\_\_\_\_  
 \_\_\_\_\_

## Apply

Now use what you know about graphs to redraw the graphs. Draw a bar graph to show that the same amount of rice and tobacco were produced in 1860. Draw a line graph to show that cotton production decreased steadily from 1800 to 1860. Then draw a circle graph to show that the same amount of cotton, tobacco, and wheat was exported.